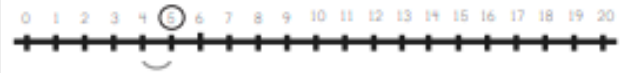









Number Line Addition

Example:	
$\underline{4} + 1 = \textcircled{5}$	 A horizontal number line with tick marks labeled from 0 to 20. A small circle is drawn around the number 4, and a curved arrow starts at 4 and points to the number 5.

$3 + 3 =$	 A horizontal number line with tick marks labeled from 0 to 20.
$8 + 1 =$	 A horizontal number line with tick marks labeled from 0 to 20.
$6 + 4 =$	 A horizontal number line with tick marks labeled from 0 to 20.
$2 + 5 =$	 A horizontal number line with tick marks labeled from 0 to 20.
$6 + 2 =$	 A horizontal number line with tick marks labeled from 0 to 20.
$5 + 4 =$	 A horizontal number line with tick marks labeled from 0 to 20.
$2 + 3 =$	 A horizontal number line with tick marks labeled from 0 to 20.

I Am Amazing

Write something amazing about yourself in each of the sun's rays. As you colour the sun, think about all the incredible things that make you special.

